

MENU-MATH



Bacon and Eggs..... \$3.99



Lemonade..... \$.77



Banana Split..... 2.16



Milk..... .95



Cake..... 1.52



Milk Shake..... 1.86



Chicken..... 4.74



Onion Rings..... 1.63



Chili..... 1.89



Pancakes..... 2.55



Cola..... .74



Pizza..... 1.17



French Fries..... .90



Root Beer..... .92



Hamburger..... 1.75



Sandwich..... 4.43



Hot Chocolate..... .94



Shrimp..... 4.10



Hot Dog..... 1.10







Spaghetti..... 1.69



ADDITION - 2 items



No regrouping



Use the prices from the menu.
Find the total cost.



1.  \$ _____
 \$ _____
Total \$ _____

5.  \$ _____
 \$ _____
Total \$ _____

2.  \$ _____
 \$ _____
Total \$ _____

6.  \$ _____
 \$ _____
Total \$ _____

3.  \$ _____
 \$ _____
Total \$ _____

7.  \$ _____
 \$ _____
Total \$ _____